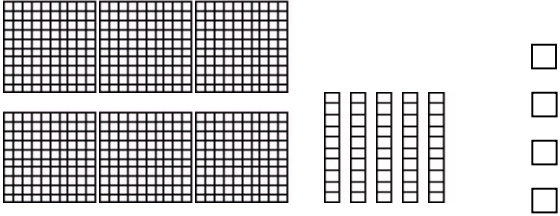
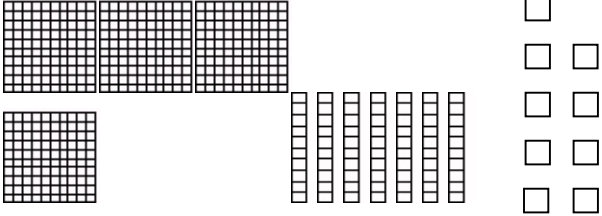
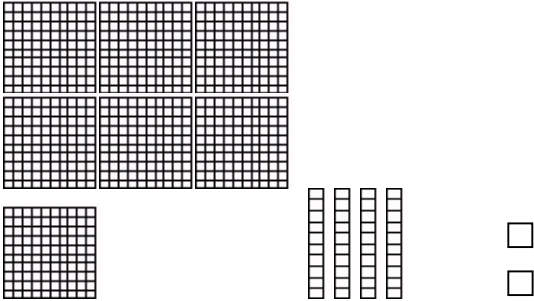
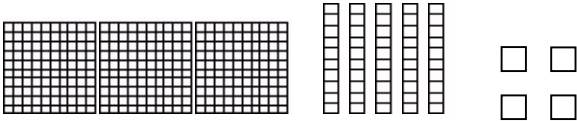
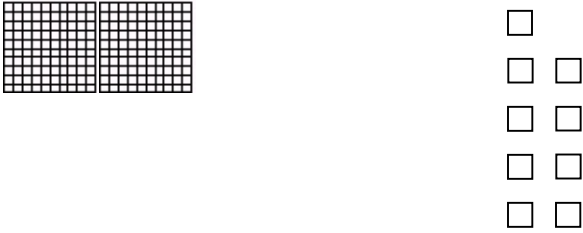
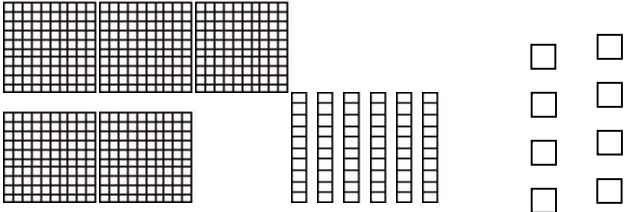


Name: \_\_\_\_\_

Date: \_\_\_\_\_

## Hundreds, Tens, and Ones

Fill in the blanks to show how many hundreds, tens, and ones there are.  
Find the secret number.

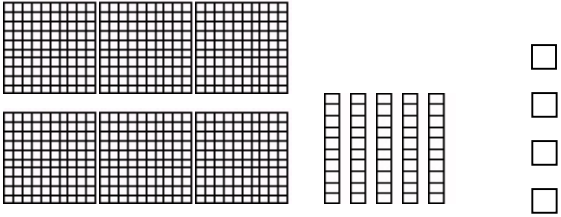
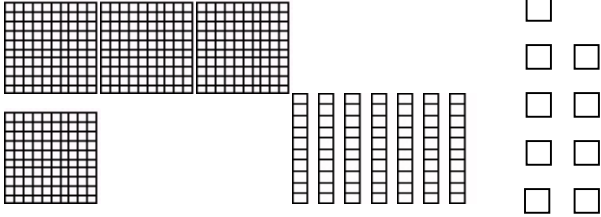
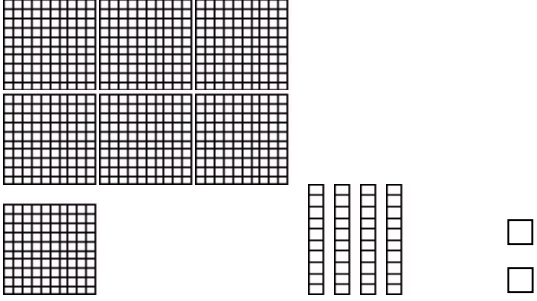
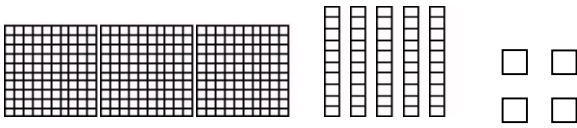

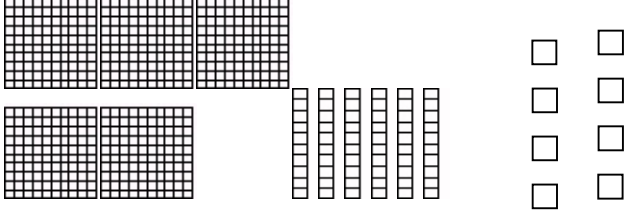
<p>1)</p>  <p>_____ hundreds    _____ tens    _____ ones</p> <p>The secret number is <span style="border: 1px solid black; display: inline-block; width: 100px; height: 25px; vertical-align: middle;"></span></p>	<p>2)</p>  <p>_____ hundreds    _____ tens    _____ ones</p> <p>The secret number is <span style="border: 1px solid black; display: inline-block; width: 100px; height: 25px; vertical-align: middle;"></span></p>
<p>3)</p>  <p>_____ hundreds    _____ tens    _____ ones</p> <p>The secret number is <span style="border: 1px solid black; display: inline-block; width: 100px; height: 25px; vertical-align: middle;"></span></p>	<p>4)</p>  <p>_____ hundreds    _____ tens    _____ ones</p> <p>The secret number is <span style="border: 1px solid black; display: inline-block; width: 100px; height: 25px; vertical-align: middle;"></span></p>
<p>5)</p>  <p>_____ hundreds    _____ tens    _____ ones</p> <p>The secret number is <span style="border: 1px solid black; display: inline-block; width: 100px; height: 25px; vertical-align: middle;"></span></p>	<p>6)</p>  <p>_____ hundreds    _____ tens    _____ ones</p> <p>The secret number is <span style="border: 1px solid black; display: inline-block; width: 100px; height: 25px; vertical-align: middle;"></span></p>

Name: \_\_\_\_\_

Date: \_\_\_\_\_

**Hundreds, Tens, and Ones****Answer Key**Fill in the blanks to show how many hundreds, tens, and ones there are.

Find the secret number.

<p>1)</p>  <p><u>6</u> hundreds      <u>5</u> tens      <u>4</u> ones</p> <p>The secret number is <span style="border: 1px solid black; padding: 5px; display: inline-block;">654</span></p>	<p>2)</p>  <p><u>4</u> hundreds      <u>7</u> tens      <u>9</u> ones</p> <p>The secret number is <span style="border: 1px solid black; padding: 5px; display: inline-block;">479</span></p>
<p>3)</p>  <p><u>7</u> hundreds      <u>4</u> tens      <u>2</u> ones</p> <p>The secret number is <span style="border: 1px solid black; padding: 5px; display: inline-block;">742</span></p>	<p>4)</p>  <p><u>3</u> hundreds      <u>5</u> tens      <u>4</u> ones</p> <p>The secret number is <span style="border: 1px solid black; padding: 5px; display: inline-block;">354</span></p>
<p>5)</p>  <p><u>2</u> hundreds      <u>0</u> tens      <u>9</u> ones</p> <p>The secret number is <span style="border: 1px solid black; padding: 5px; display: inline-block;">209</span></p>	<p>6)</p>  <p><u>5</u> hundreds      <u>6</u> tens      <u>8</u> ones</p> <p>The secret number is <span style="border: 1px solid black; padding: 5px; display: inline-block;">568</span></p>